





1  Relie chaque horloge à l'heure correspondante.




• 1 heure •




• 3 heures •




• 4 heures •



• 6 heures •




• 7 heures •




• 9 heures •

• 10 heures •



• 11 heures •



2 ✎ Écris l'heure indiquée sur chaque horloge.

